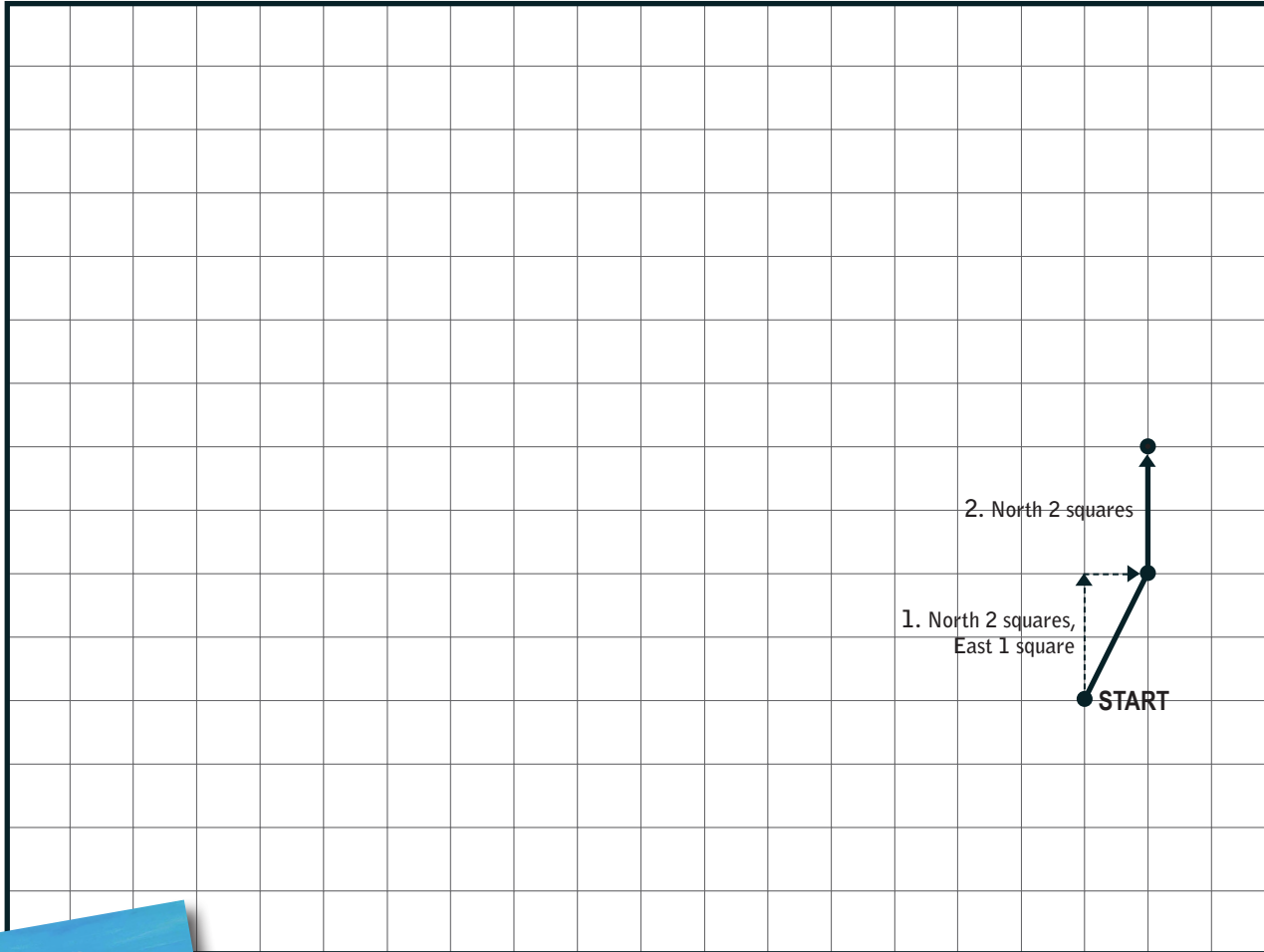
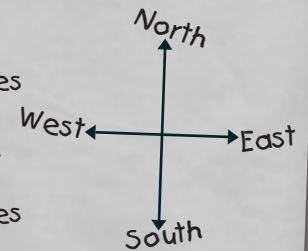


# Come Fly with Captain Kangaroo



## Captain Kangaroo's Flight Plan

1. North 2 squares, east 1 square ✓
2. North 2 squares ✓
3. Northwest 3 squares
4. North 1 square
5. North 2 squares, west 1 square
6. Southwest 1 square
7. South 2 squares
8. West 1 square
9. Northwest 2 squares
10. West 2 squares
11. Southwest 1 square
12. West 1 square
13. Southwest 4 squares
14. South 2 squares
15. Southeast 3 squares
16. East 3 squares, north 1 square
17. East 3 squares
18. Southeast 3 squares
19. East 1 square
20. Northeast 2 squares
21. North 1 square



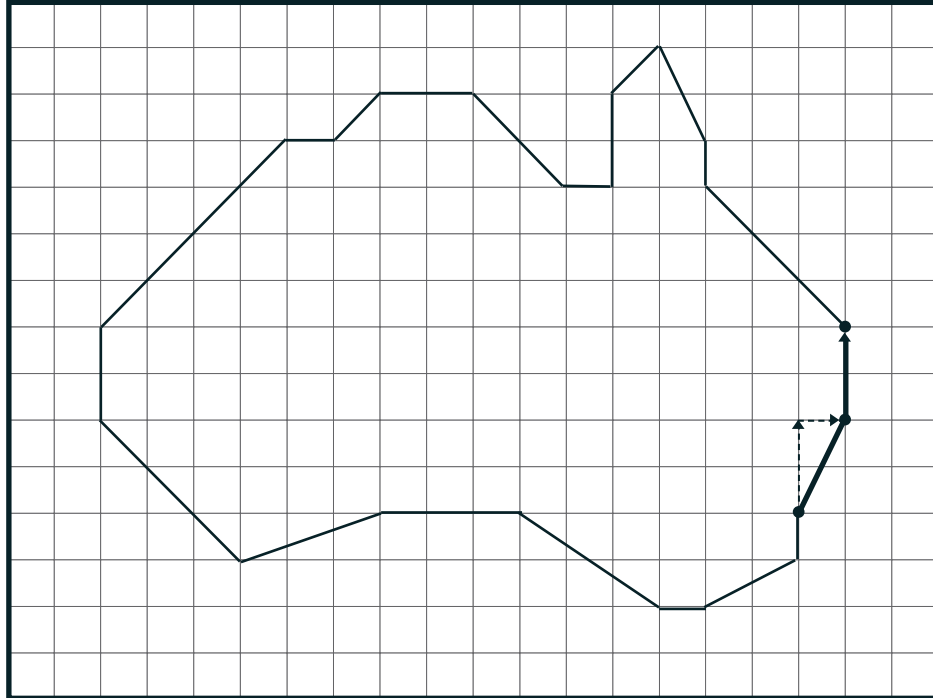
Captain Kangaroo has set out to fly around the entire coastline of a particular country. At the end of every day, he marks how far and in what direction he travelled. Can you mark every stop and draw out his path in order to guess what country it is? The first two have been marked for you.



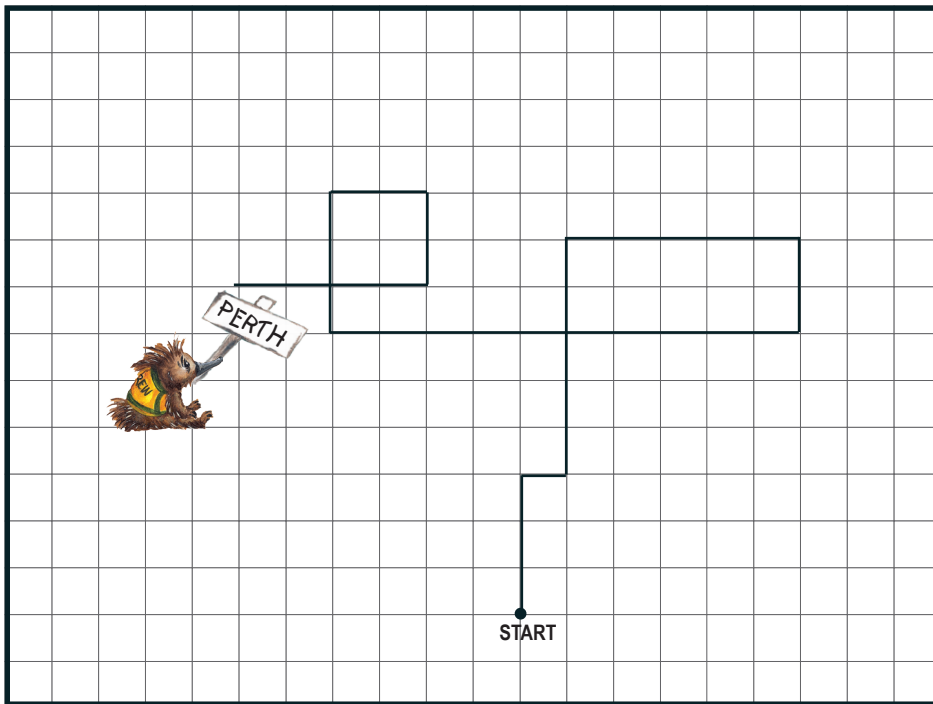
# Come Fly with Captain Kangaroo

# Answer Key

## Flight Plan



## Mystery Flight



## Airport X-Ray

Answers: Cricket Bat, Umbrella, Shoes, Toothbrush, Hat, Pants, Fishing Rod, Binoculars, T-Shirt, Golf Club, Sunglasses, A Possum!